


HOME Challenge Sheet

Year 1 and 2

1

How many steps?



Count how many steps it takes you to get from one side of the room to the other. Which room takes the most steps?


2

In height order

Collect 5 items that you can hold in your hands. Now order the items from tallest to shortest.

3

Doors or windows



Count the number of windows in your house.

Count the number of doors in your house.

Do you have more doors or windows?

4


Numbers all around!

How many items in your house have a number on them?
TV remote control, clock, etc.

Which object has the most numbers?

5

Traffic lights



Look around your house for red, yellow and green items. Every time you see an item of this colour write it down.

Which colour is the most popular?


6

Weigh it up

Collect 10 items from your house. Order them from lightest to heaviest. Now order them from tallest to shortest.

7

How many body parts?



How many people are in your house?

How many eyes in total?


How many legs?

How many noses?

How many toes?

8

2D Shape Hunt



Count how many of the following shapes you can find in your house.

Squares

Rectangles

Triangles

9

How many handles?

Count how many handles are in your house. Look for doors, cupboards, windows etc. How many did you find?

10

Maths on the Move number trail

Download and cut out the question cards and follow the answers around the house. [Download.](#)